







Name: _____ Class: _____


Find each product.


1 $2 \times 80 =$ 


2 $6 \times 50 =$ 


3 $5 \times 30 =$ 


4 $4 \times 70 =$ 


5 $8 \times 10 =$ 


6 $7 \times 20 =$ 


7 $9 \times 60 =$ 


8 $2 \times 40 =$ 


9 $1 \times 50 =$ 


10 $2 \times 70 =$ 


11 $9 \times 20 =$ 


12 $3 \times 90 =$ 


13 $1 \times 10 =$ 


14 $9 \times 80 =$ 


15 $5 \times 40 =$ 


16 $8 \times 20 =$ 

17 $3 \times 70 =$ 

18 $1 \times 60 =$ 

19 $6 \times 30 =$ 

20 $2 \times 30 =$ 

21 $7 \times 50 =$ 

22 $4 \times 90 =$ 